

# Lecture 7

## Physics 106

Spring 2006

### Intro to Equilibrium

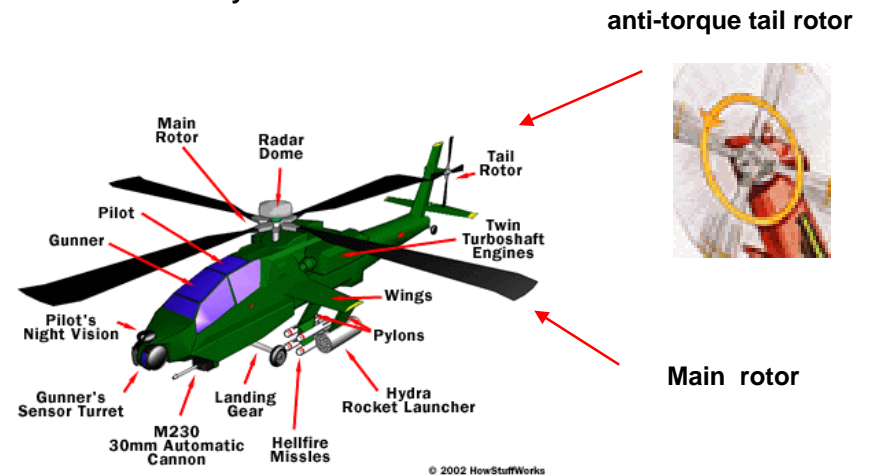
<http://web.njit.edu/~sirenko/>

3/3/2006

Andrei Sirenko, NJIT

1

How does it fly ?



3/3/2006

Andrei Sirenko, NJIT

2

Who is this person?

- a) Von Zeppelin
- b) One of the Wright brothers
- c) Igor Sikorsky



3/3/2006

Andrei Sirenko, NJIT

3

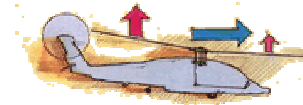
Igor Sikorsky  
(1889- 1972)



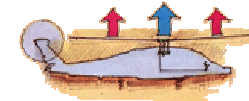
First experiment: 1909

Since 1920's: Stratford, CO


FORWARD



TAKEOFF  
AND HOVER



BACKWARD



Main rotor



(1931 – 1942)

In WWII: combat rescue and  
Medevac missions

3/3/2006

Andrei Sirenko, NJIT

4

# Equilibrium



# Equilibrium

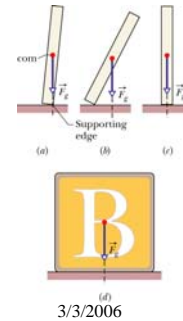
Balance of Forces:

$$\vec{F}_{\text{net}} = \frac{d\vec{P}}{dt} = 0$$

Balance of Torques:

$$\vec{\tau}_{\text{net}} = \frac{d\vec{L}}{dt} = 0$$

$$\vec{P} = 0$$



1. The vector sum of all the external forces that act on the body must be zero.
2. The vector sum of all the external torques that act on the body, measured about any possible point, must be zero.
3. The linear momentum  $\vec{P}$  of the body must be zero.
4. The gravitational force  $\vec{F}_g$  on a body effectively acts on a single point, called the center of gravity (cog) of the body. If  $g$  is the same for all elements of the body, then the body's cog is coincident with the body's center of mass.

Andrei Sirenko, NJIT

6

# Equilibrium

Stable vs. Unstable  
Static Equilibrium

Balance of Forces:

$$\vec{F}_{\text{net}} = \frac{d\vec{P}}{dt} = 0$$

An equilibrium point is stable if small changes in the position lead to restoring forces back to equilibrium.

Balance of Torques:

$$\vec{\tau}_{\text{net}} = \frac{d\vec{L}}{dt} = 0$$

If it moves away from the equilibrium point when displaced slightly, it is unstable.

$$\vec{P} = 0$$



3/3/2006

Andrei Sirenko, NJIT

7

# Equilibrium

Balance of Forces:

$$\vec{F}_{\text{net}} = \frac{d\vec{P}}{dt} = 0$$

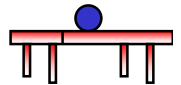
Indeterminate Equilibria

If the force and torque equations lead to more unknown forces than equations, there are an infinite number of solutions.

Balance of Torques:

$$\vec{\tau}_{\text{net}} = \frac{d\vec{L}}{dt} = 0$$

Examples: Four-legged table  
Two axle trailer  
Detailed material properties and history determine the forces.



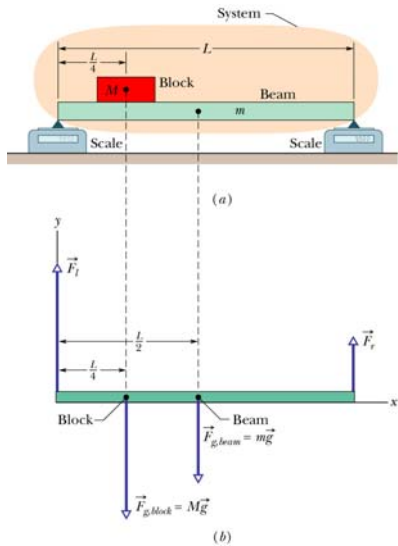
$$\vec{P} = 0$$

3/3/2006

Andrei Sirenko, NJIT

8

## Sample Problem XIII – 1



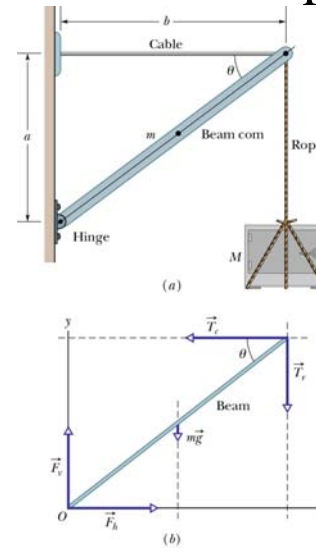
A uniform beam of length  $L$  and mass  $m = 1.8$  kg is at rest with its ends on two scales. A uniform block with mass  $M = 2.7$  kg is at rest on the beam, with its center a distance  $L/4$  from the beam's left end. What do the scales read?

3/3/2006

Andrei Sirenko, NJIT

9

## Sample Problem XIII – 3



A safe of mass  $M = 430$  kg is hanging by a rope from a boom with dimensions  $a = 1.9$  m and  $b = 2.5$  m. The boom consists of a hinged beam and a horizontal cable that connects the beam to a wall. The uniform beam has a mass  $m = 85$  kg. The masses of the cable and the rope are negligible.

- What are the tension  $T_c$  in the cable? In other words, what is the magnitude of the force  $\underline{T}_c$  on the beam from the cable?
- Find the magnitude  $F$  of the net force on the beam from the hinge.

3/3/2006

Andrei Sirenko, NJIT

10