

Midterm Exam 1

CS 341-009: Foundations of Computer Science II — **Fall 2023, hybrid section**

Prof. Marvin K. Nakayama

Print family (or last) name: _____

Print given (or first) name: _____

I have read and understand all of the instructions below, and I will obey the University Policy on Academic Integrity.

Signature and Date

- This exam has 8 pages in total, numbered 1 to 8. Make sure your exam has all the pages.
- Note the number written on the upper right-hand corner of the first page. On the sign-up sheet being passed around, print your name next to this number.
- This exam will be 1 hour and 20 minutes in length.
- This is a closed-book, closed-note exam. Unauthorized materials, including electronic devices (e.g., cellphone, smart watch, calculator), are not allowed.
- For all problems, follow these instructions:
 1. Give only your answers in the spaces provided. Only what is written in the answer space will be graded, and points will be deducted for any scratch work in the answer space. Use the scratch-work area or the backs of the exam sheets to work out your answers before filling in the answer space.
 2. DFA stands for deterministic finite automaton; NFA stands for nondeterministic finite automaton; PDA stands for push-down automaton; CFG stands for context-free grammar.
 3. For any state diagrams that you draw, you must **include all states and transitions**.
 4. For any proofs, be sure to provide a step-by-step argument, with justifications for every step. If you are asked to prove a result X, you may use in your proof of X any other result Y without proving Y. However, make it clear what the other result Y is that you are using; e.g., write something like, “By the result that $A^{**} = A^*$, we know that”

Problem	1	2	3	4	5	Total
Points						

1. [20 points, Multiple Choice] For each of the following questions, circle the letter of the correct answer.

1.1. The class of context-free languages satisfies which of the following:

- (a) it is closed under intersection.
- (b) it is closed under Kleene star.
- (c) it is closed under complementation.
- (d) it contains every possible language.
- (e) it does not contain every regular language.
- (f) none of the above.

1.2. Suppose that A , B , and C are context-free languages. Then

- (a) $\overline{A}(B \cup C)$ must be context-free.
- (b) $\overline{A}(B \cup C)$ must be non-context-free.
- (c) $A(B \cup C)$ must be context-free.
- (d) $\overline{A}(B \cup C) = (B \cup C)\overline{A}$.
- (e) none of the above.

1.3. Let $\Sigma = \{0, 1\}$, and let L be the language of all strings over Σ that have odd length or an even number of 1's. Consider the following regular expressions:

- (i) $(10^*1)^* \cup ((0 \cup 1)(0 \cup 1))^*(0 \cup 1)$
- (ii) $(10^*1 \cup 0)^* \cup ((0 \cup 1)(0 \cup 1))^*(0 \cup 1)$
- (iii) $((0 \cup 1)(0 \cup 1))^*(0 \cup 1) \cup (0^*10^*10^*)^*$

Which of the following statements is correct?

- (a) Only regular expression (i) generates L .
- (b) Only regular expression (ii) generates L .
- (c) Only regular expression (iii) generates L .
- (d) Only regular expressions (i) and (ii) generate L .
- (e) Only regular expressions (i) and (iii) generate L .
- (f) Only regular expressions (ii) and (iii) generate L .
- (g) All 3 regular expressions generate L .
- (h) None of the 3 regular expressions generates L .

1.4. If an infinite number of strings is removed from a nonregular language A , then the resulting language B satisfies which of the following?

- (a) B must be a regular language.
- (b) B must be a nonregular language.
- (c) B must be a non-context-free language.
- (d) none of the above.

- 1.5. If A is a regular language, then
- A must be finite.
 - A must be context-free.
 - A must be closed under concatenation.
 - none of the above.
- 1.6. If a language L is recognized by a PDA, then
- L must be finite.
 - L must be infinite.
 - L can be finite and also L can be infinite.
 - does not have a context-free grammar in Chomsky normal form.
 - none of the above.
- 1.7. If a language L has a regular expression, then
- L must be a nonregular language.
 - L must be a non-context-free language.
 - L must have a context-free grammar.
 - L must be closed under reversal.
 - none of the above.
- 1.8. If L_1 and L_2 are non-context-free languages, then
- $L_1 \cap L_2$ must be non-context-free.
 - $L_1 \cap L_2$ must be context-free.
 - $L_1 \cap L_2$ can be context-free and also $L_1 \cap L_2$ can be non-context-free.
 - $L_1 \cap L_2$ must be regular.
 - none of the above.
- 1.9. If A and B are any languages, then
- A^* must be regular.
 - $A \circ B$ must be regular.
 - $A \cap B$ must be regular.
 - all of the above are true.
 - none of the above are true.
- 1.10. The language $A = \{ 0^{2n}1^{3n}0^n \mid n \geq 0 \}$ satisfies which of the following?
- A has regular expression $(00)^*(111)^*(0)^*$.
 - A is recognized by some NFA.
 - A is recognized by some PDA.
 - A is not context-free.
 - none of the above.

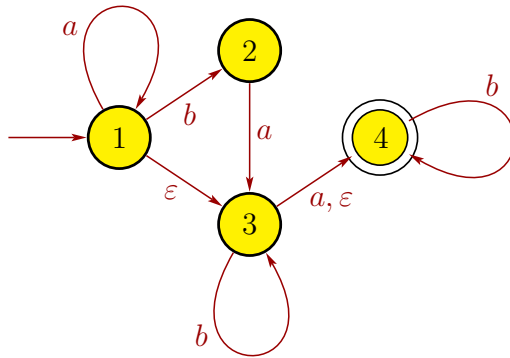
2. [20 points] Give short answers to each of the following parts. Each answer should be at most a few sentences. Be sure to define any notation that you use.

(a) Let $\Sigma = \{a, b\}$, and let A be the set of strings $w \in \Sigma^*$ such that $|w|$ is even and w ends in b , where $|w|$ denotes the length of w . Give a regular expression for A .

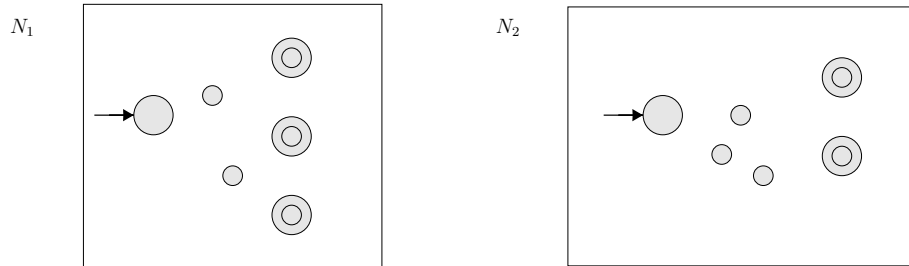
Answer: _____

(b) Give a regular expression for the language recognized by the NFA below.

Answer: _____

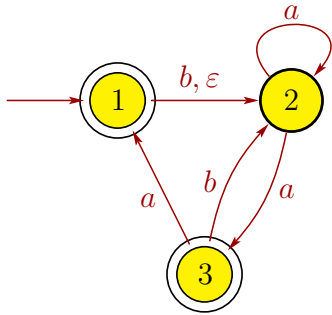


- (c) Suppose that language A_1 is recognized by NFA N_1 below, and language A_2 is recognized by NFA N_2 below. Note that the transitions are not drawn in N_1 and N_2 . Draw a picture of an NFA for $A_3 = A_2^*$ (note how A_3 is defined). You do not need to give a 5-tuple description of your NFA for A_3 .



- (d) Suppose that A_1 is a language defined by a CFG $G_1 = (V_1, \Sigma, R_1, S_1)$, and A_2 is a language defined by a CFG $G_2 = (V_2, \Sigma, R_2, S_2)$, where the alphabet Σ is the same for both languages and $V_1 \cap V_2 = \emptyset$. Let $A_3 = A_2 \circ A_1$ (note the order). Give a CFG G_3 for A_3 in terms of G_1 and G_2 . You do not have to prove the correctness of your CFG G_3 , but do not give just an example.

3. [15 points] Let N be the following NFA with $\Sigma = \{a, b\}$, and let $C = L(N)$.



Give a DFA for C . You only need to draw the state diagram (graph); do not give the 5-tuple.

Scratch-work area

4. [30 points] For $\Sigma = \{a, b, c\}$, let

$$L = \{ w \in \Sigma^* \mid w = w^{\mathcal{R}}, |w| \text{ is odd} \},$$

where $w^{\mathcal{R}}$ denotes the reverse of w , and $|w|$ is the length of w .

(a) Give a context-free grammar G for L . Be sure to specify G as a 4-tuple $G = (V, \Sigma, R, S)$.

(b) Give a PDA for L . You only need to draw the state diagram (graph).

Scratch-work area

5. [15 points] Recall the pumping lemma for regular languages:

Theorem: If L is a regular language, then there exists a pumping length p where, if $s \in L$ with $|s| \geq p$, then s can be split into three pieces $s = xyz$ such that (i) $xy^iz \in L$ for each $i \geq 0$, (ii) $|y| \geq 1$, and (iii) $|xy| \leq p$.

For $\Sigma = \{a, b, c\}$, let $A = \{w \in \Sigma^* \mid w = w^{\mathcal{R}}, |w| \text{ is odd}\}$, where $w^{\mathcal{R}}$ denotes the reverse of w , and $|w|$ is the length of w . Is A a regular or nonregular language? If A is regular, give a regular expression for A . If A is not regular, prove that it is a nonregular language.

Circle one:

Regular Language

Nonregular Language